

ROUND TO THE  
NEAREST 1,000



**GET READY**



1) Complete the sequence.

1,000	2,000		4,000			7,000
-------	-------	--	-------	--	--	-------

2) Round 4,583 to the nearest 10

3) Round 2,391 to the nearest 100

1) Complete the sequence.

1,000	2,000	3,000	4,000	5,000	6,000	7,000
-------	-------	-------	-------	-------	-------	-------

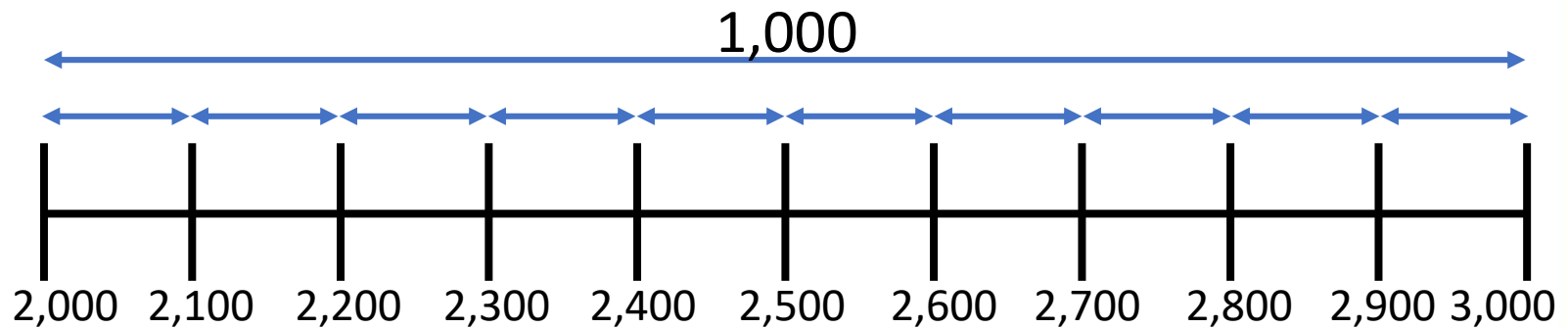
2) Round 4,583 to the nearest 10      4,580

3) Round 2,391 to the nearest 100      2,400

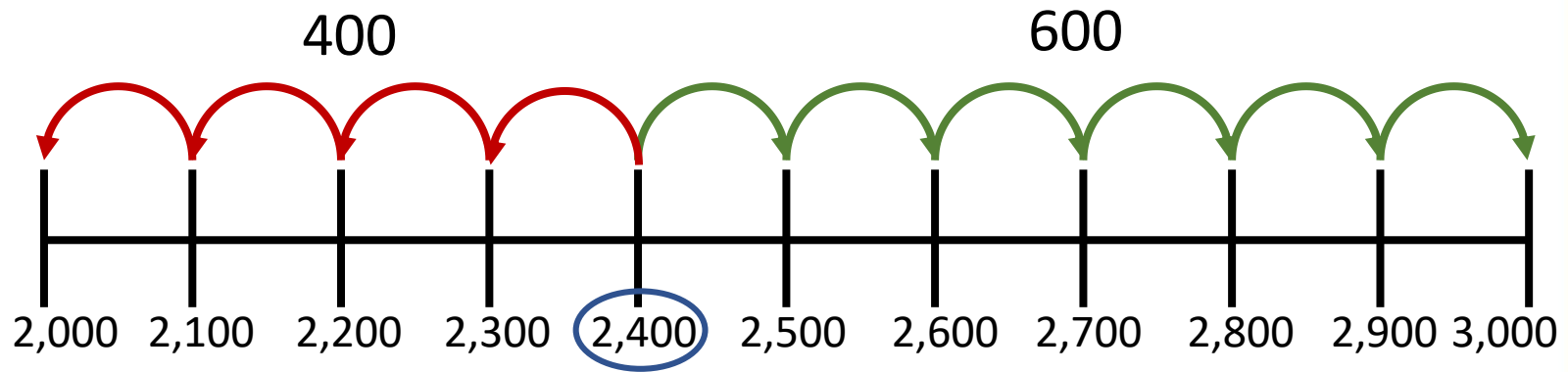
LET'S LEARN



Round 2,400 to the nearest 1,000



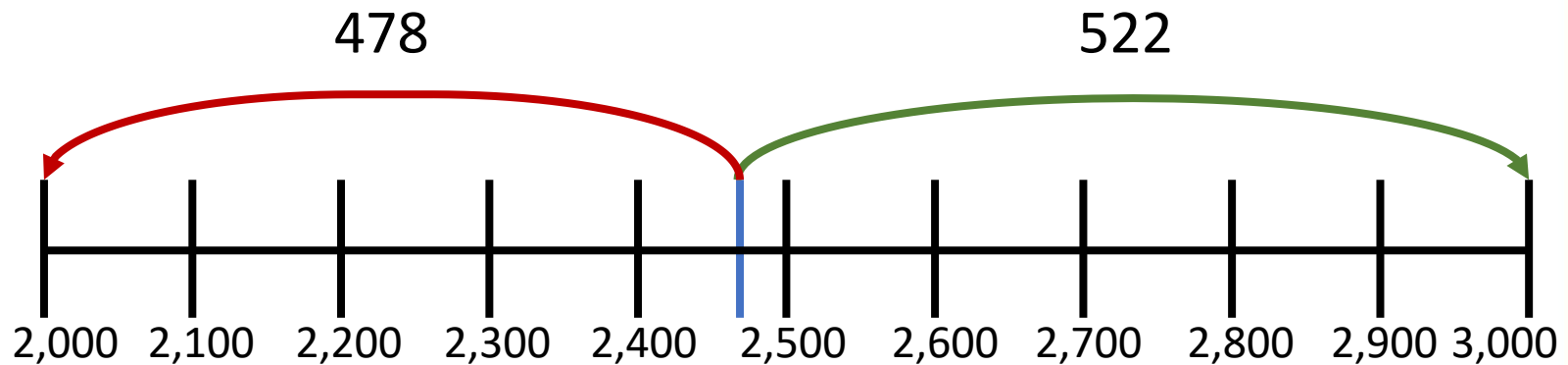
Round 2,400 to the nearest 1,000



2,400 is closer to 2,000 than 3,000

2,400 rounded to the nearest 1,000 is 2,000

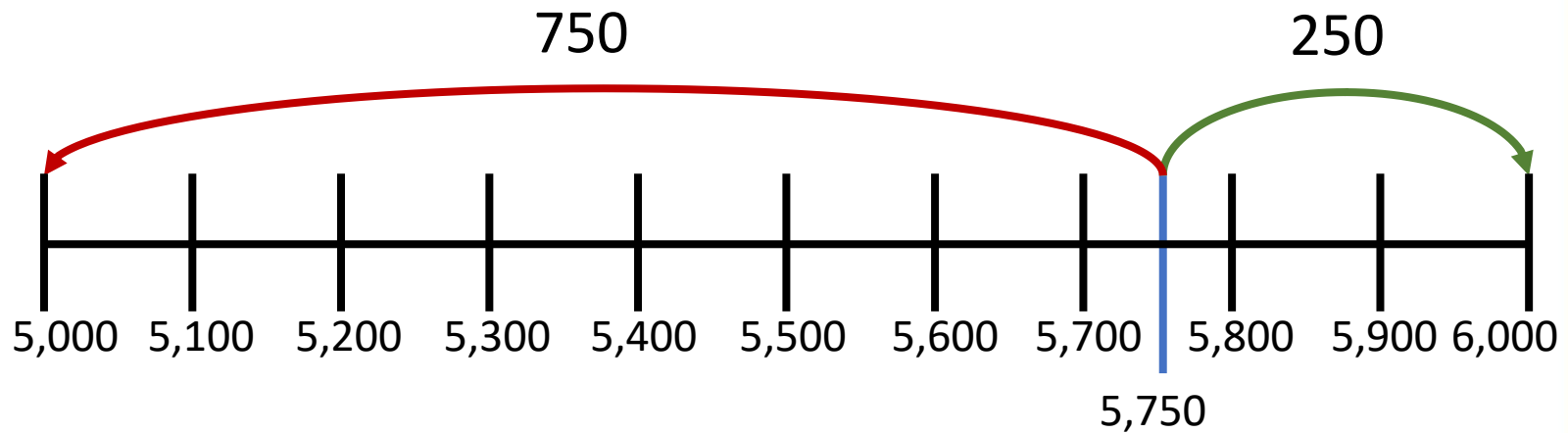
Round 2,478 to the nearest 1,000



2,478 is closer to 2,000 than 3,000

2,478 rounded to the nearest 1,000 is 2,000

Round 5,750 to the nearest 1,000

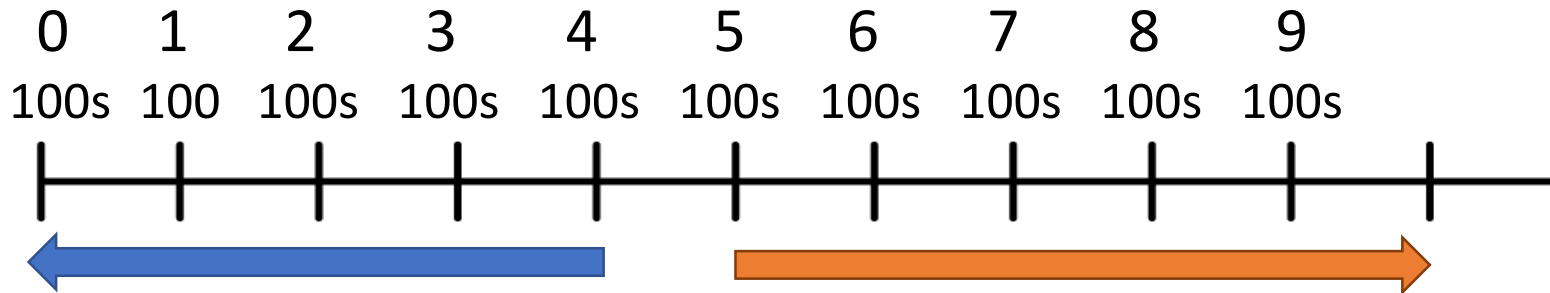


5,750 is closer to 6,000 than 5,000

5,750 rounded to the nearest 1,000 is 6,000

# Round 5,750 to the nearest 1,000

Thousands	Hundreds	Tens	Ones
5	7	5	0



5,750 rounded to the nearest 1,000 is 6,000

## YOUR TURN

Have a go at questions  
1 – 3 on the worksheet



6,508

Round to the  
nearest 1,000

hundreds digit

7,000

Round to the  
nearest 100

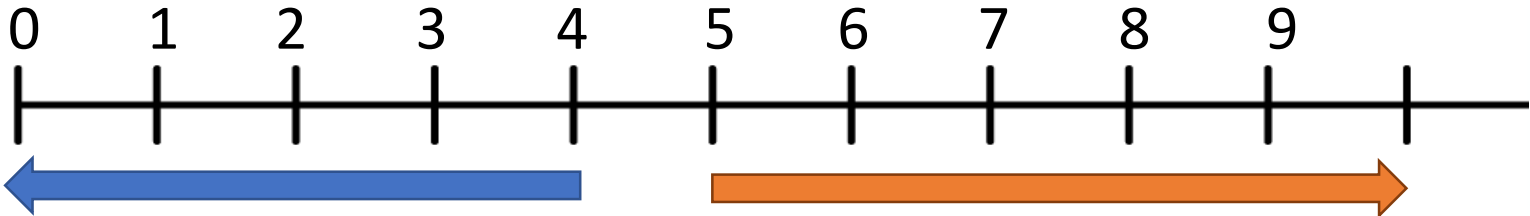
tens digit

6,500

Round to the  
nearest 10

ones digit

6,510



Have a think



8,992

Round to the  
nearest 1,000

hundreds digit

9,000

Round to the  
nearest 100

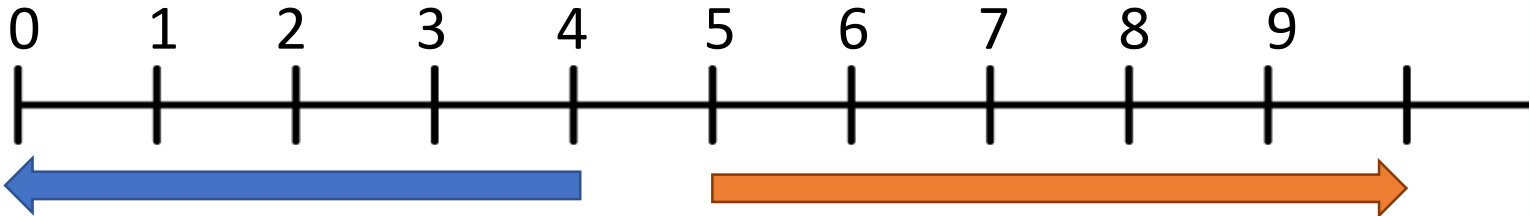
tens digit

9,000

Round to the  
nearest 10

ones digit

8,990



**YOUR TURN**

Have a go at the rest of  
the worksheet

