

FIND 1, 10, 100
MORE OR LESS



GET READY



Continue the sequences.

1) 17, 18, 19, _____, _____, _____

2) 23, 33, 43, _____, _____, _____

3) 180, 170, 160, _____, _____, _____

4) 180, 280, 380, _____, _____, _____

Continue the sequences.

1) 17, 18, 19, 20, 21, 22

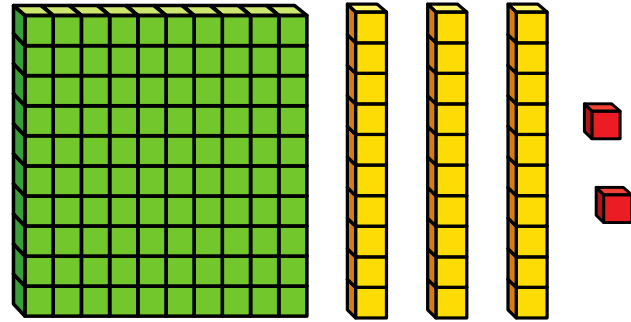
2) 23, 33, 43, 53, 63, 73

3) 180, 170, 160, 150, 140, 130

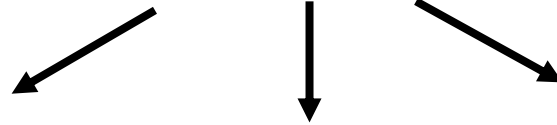
4) 180, 280, 380, 480, 580, 680

LET'S LEARN






132

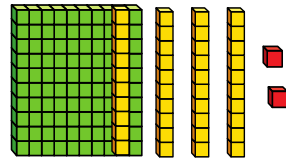


100 more



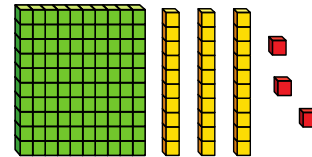
232

10 more



142

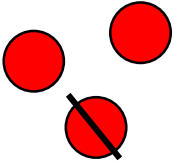
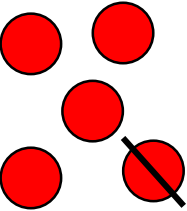
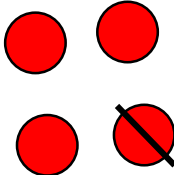
1 more




133

Have a think



Hundreds	Tens	Ones
		

354



100 less

254

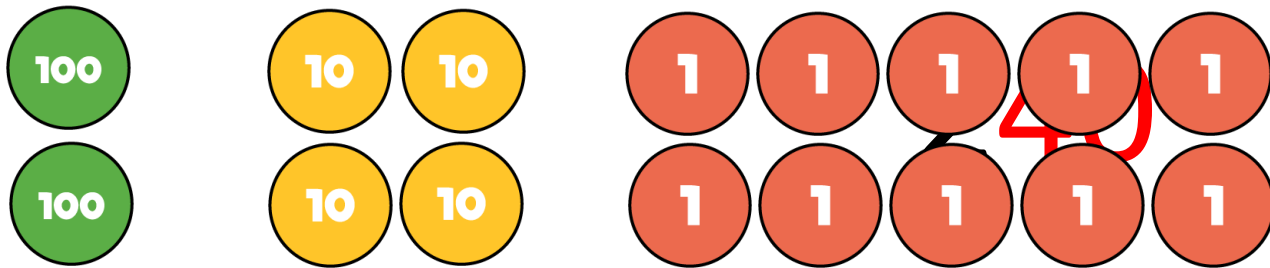
10 less

3**4**4

1 less

35**3**

What is 1 more than 239?




YOUR TURN

Have a go at questions 1
and 2 on the worksheet



292

is 10 less than 302



Impossible! There are no tens to subtract.



YOUR TURN

Have a go at questions
3 - 6 on the worksheet



Have a think



Hundreds	Tens	Ones

Dexter adds one more counter.
What new number could he make?

404

314

305

560 is one hundred less than
the number I am hiding.



100 less
→

560

←
100 more

YOUR TURN

Have a go at the rest of
the worksheet

