

ADD TWO  
4-DIGIT NUMBERS -  
MORE THAN ONE  
EXCHANGE



**GET READY**



1) 10 tens = \_\_\_ hundred

2) 16 tens = \_\_\_ hundred and \_\_\_ tens

3) 1,300 = \_\_\_ hundreds

1) 10 tens = 1 hundred

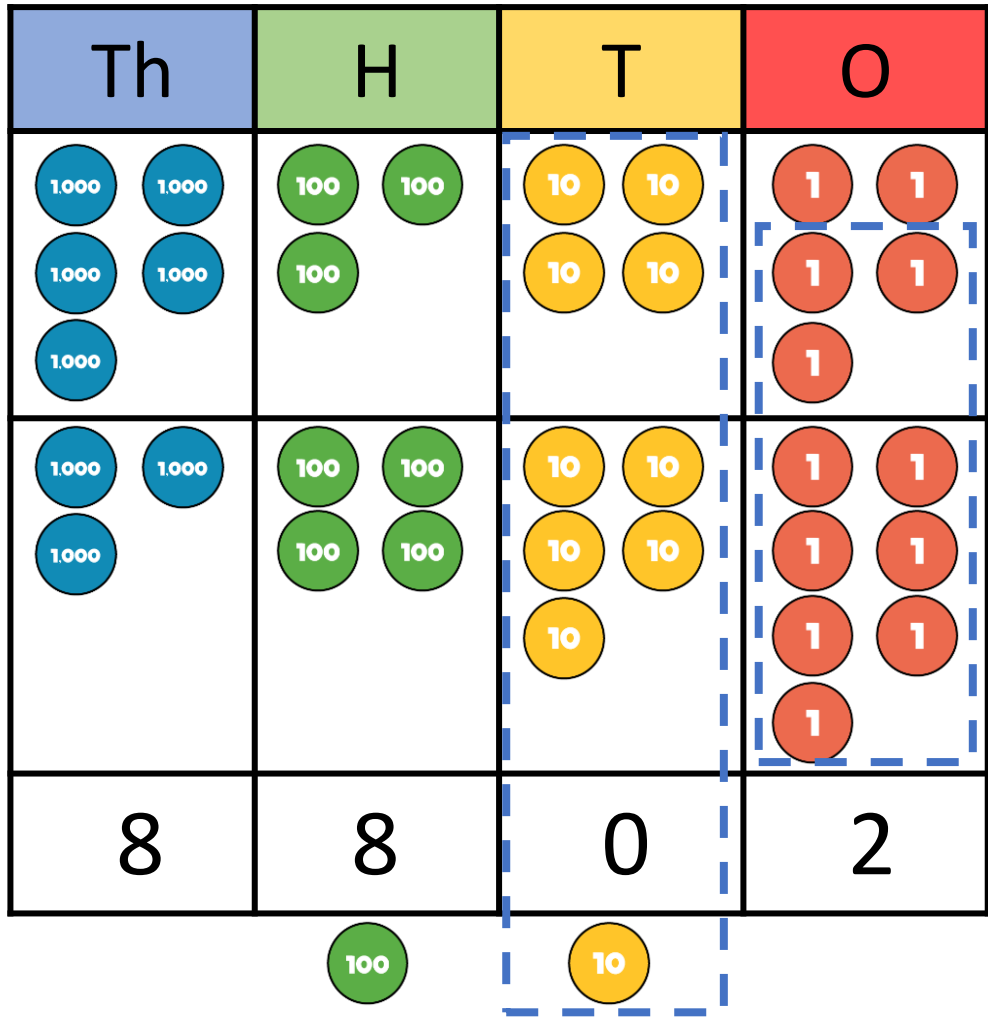
2) 16 tens = 1 hundred and 6 tens

3) 1,300 = 13 hundreds


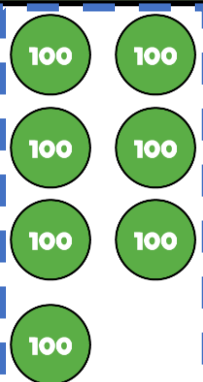

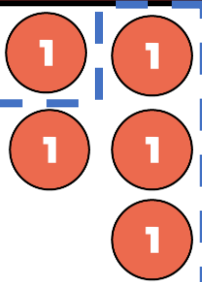





LET'S LEARN



	Th	H	T	O
	5	3	4	5
+	3	4	5	7
	8	8	0	2
		1	1	



	Th	H	T	O
	2	7	3	5
+		3	1	6
	<del>2</del>	0	5	1
	1		1	

Th	H	T	O
			
			
3	0	5	1
			

## YOUR TURN

Have a go at questions  
1 – 3 on the worksheet




Two cars are for sale.

The first car costs £3,655



The second car costs £1,755 more.



1) How much does the second car cost? **£5,410**

2) Mr Jones has £9,000

He wants to buy both cars.

Does he have enough money?

**No, he does not have enough money.**

	Th	H	T	O
	5	4	1	0
+	3	6	5	5
	<del>9</del>	<del>0</del>	<del>6</del>	<del>5</del>
	<u>1</u>	1	1	

## YOUR TURN

Have a go at questions  
4 and 5 on the worksheet



	Th	H	T	O
	6	8	7	9
+	2	3	1	5
<hr/>				
	9	1	9	4
	1		1	

$$9 + 5 = 14$$

8 hundreds + 3 hundreds = 11 hundreds

**YOUR TURN**

Have a go at the rest of  
the worksheet

