


COUNT IN 50s



GET READY



1) How many fingers?



2) What is the total amount?




3) What comes next?

5, 10, 15, 20, 25 ____

4) What comes next?

50, 100, 150, 200, 250 ____

1) How many fingers?



2) What is the total amount?



3) What comes next?

5, 10, 15, 20, 25, 30


4) What comes next?

50, 100, 150, 200, 250, 300

LET'S LEARN



How many sweets are there altogether?



There are 350 sweets altogether.

Complete the number tracks.

50	100	150	200	250	300	350	400	450
----	-----	-----	-----	-----	-----	-----	-----	-----

900	850	800	750	700	650	600	550	500
-----	-----	-----	-----	-----	-----	-----	-----	-----

Which number is in the wrong place?

Multiple of 50

750 50

150 1000

300

150

Not multiple of 50

230 480

550 290

540

520

Have a think



YOUR TURN

Have a go at questions
1 - 4 on the worksheet



Use $<$, $>$ or $=$ to complete each comparison.

150

200

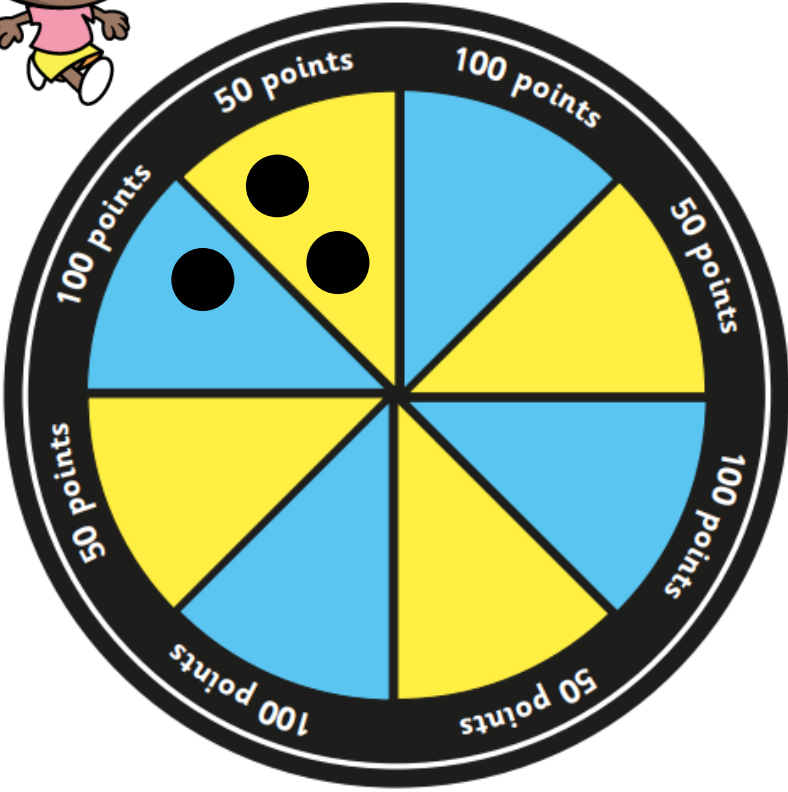
Sweets 50 Sweets 50 Sweets 50 $<$ Sweets 100 Sweets 100

250 g

100 g 50 g 50 g 50 g $=$ 250 g

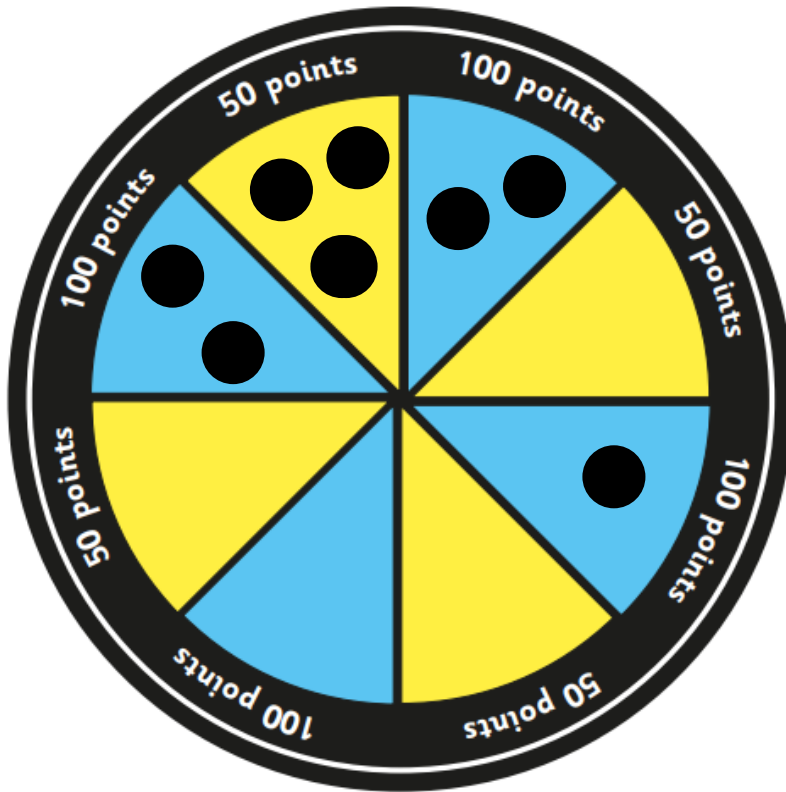
Have a think 

What is Whitney's score?



200

What other possible scores could you make with 3 tiddlywinks?



200

150

250

300

Have a think



YOUR TURN

Have a go at the rest of
the questions on the
worksheet

